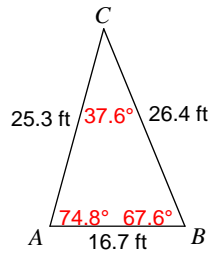


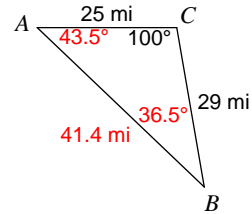
FER #2--Law Sines and Cosines

Solve each triangle. Round your answers to the nearest tenth.

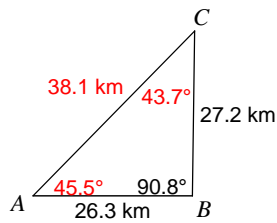
1)



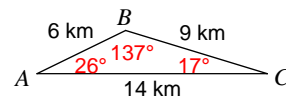
2)



3)

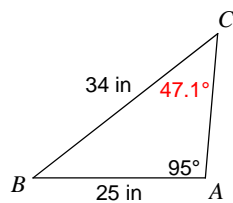


4)

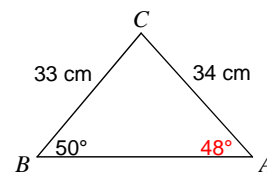


Find each measurement indicated. Round your answers to the nearest tenth.

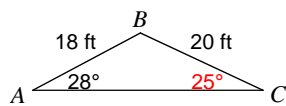
5) Find $m\angle C$



6) Find $m\angle A$



7) Find $m\angle C$



8) Find $m\angle A$

