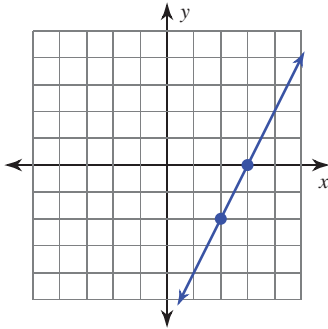


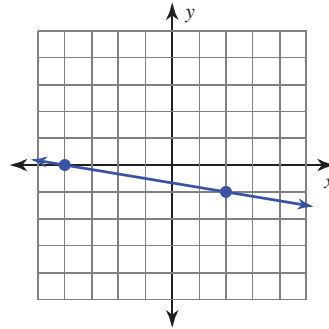
Finding Slope

Find the slope of each line.

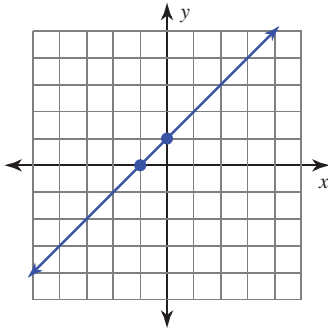
1)



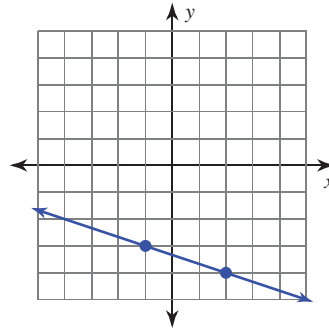
2)



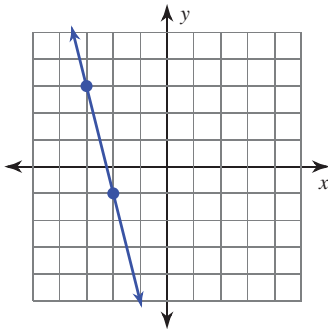
3)



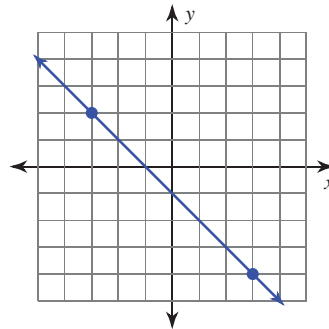
4)



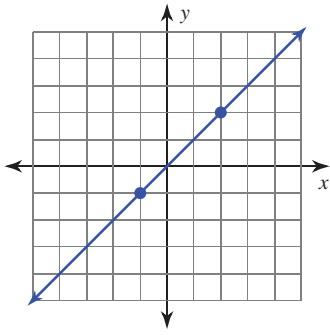
5)



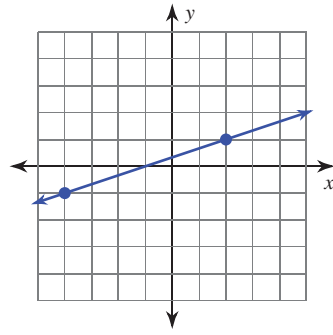
6)



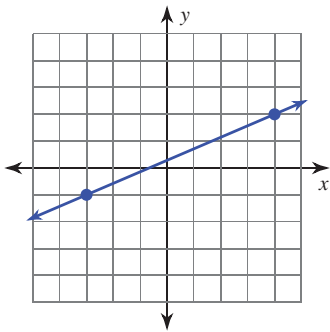
7)



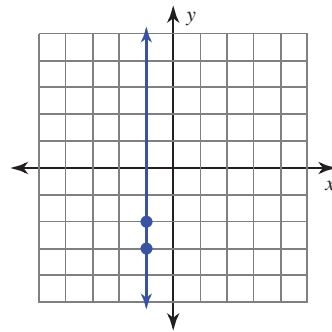
8)



9)



10)



Find the slope of the line through each pair of points.

11) $(16, 0), (-5, 1)$

12) $(-7, 7), (-19, 14)$

13) $(-4, 13), (7, 8)$

14) $(2, 12), (2, -7)$

15) $(16, 1), (-6, -18)$

16) $(-14, -19), (4, -6)$